

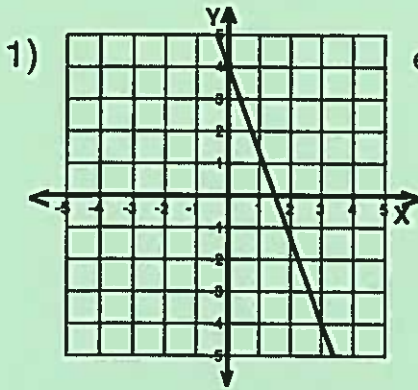
Name : _____

Score : _____

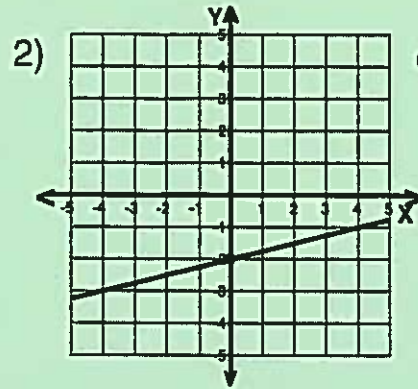
Teacher : _____

Date : _____

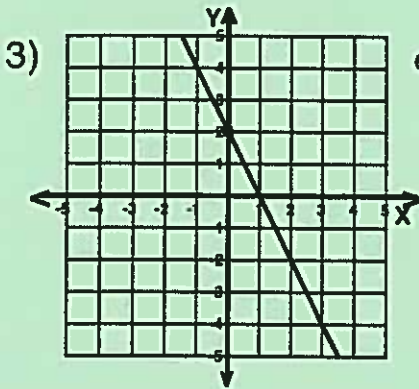
Sketch-Each-Line



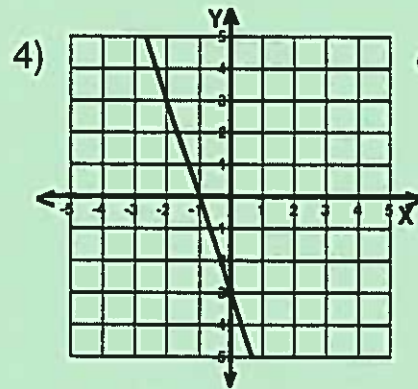
equation $y = -\frac{8}{3}x + 4$



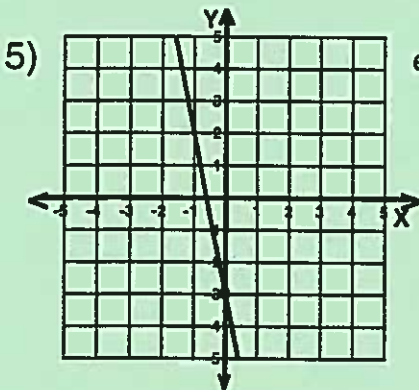
equation $y = \frac{1}{4}x - 2$



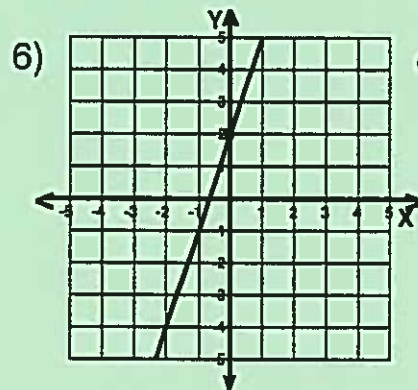
equation $y = -2x + 2$



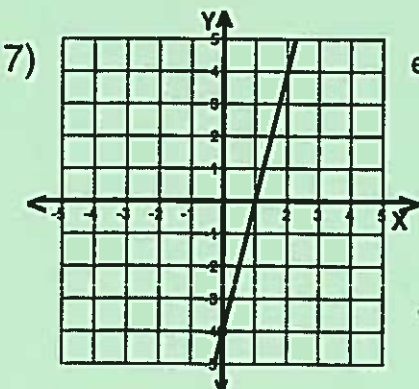
equation $y = -3x - 3$



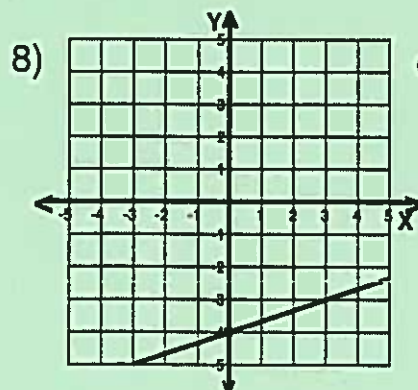
equation $y = -5x - 3$



equation $y = 3x + 2$



equation $y = 4x - 4$



equation $y = \frac{1}{3}x - 4$

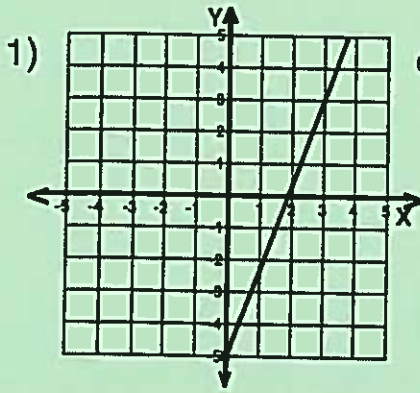
Name : _____

Score : _____

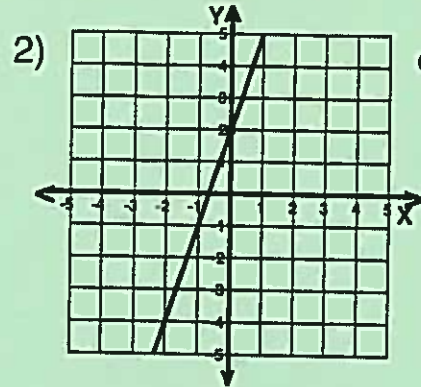
Teacher : _____

Date : _____

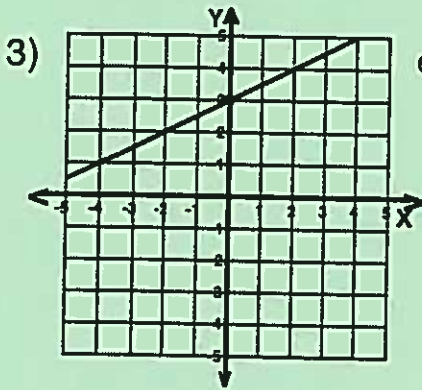
Sketch Each Line



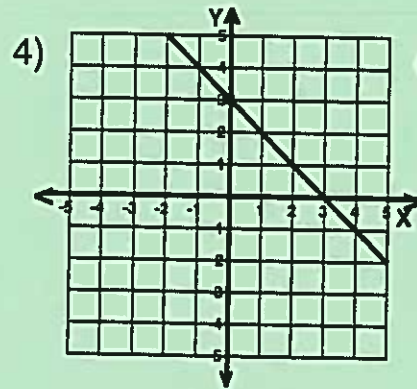
equation $y = \frac{8}{3}x - 5$



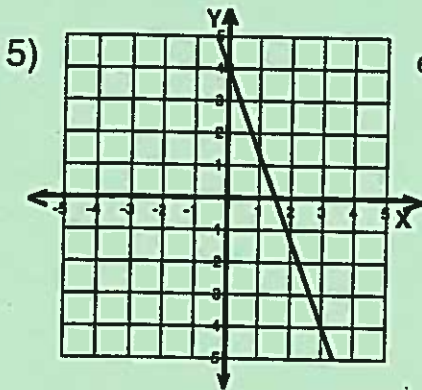
equation $y = 3x + 2$



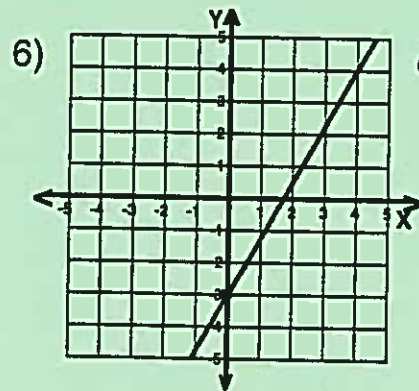
equation $y = \frac{1}{2}x + 3$



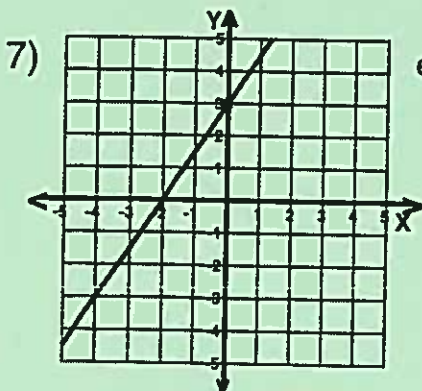
equation $y = -x + 3$



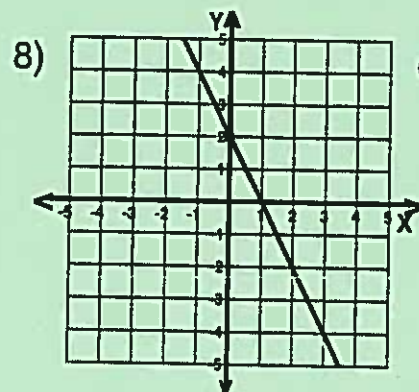
equation $y = -\frac{8}{3}x + 4$



equation $y = \frac{7}{4}x - 3$



equation $y = \frac{3}{2}x + 3$



equation $y = -2x + 2$

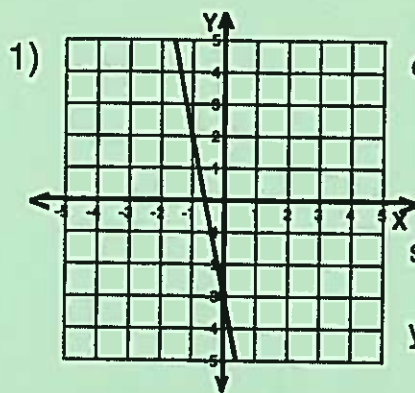
Name : _____

Score : _____

Teacher : _____

Date : _____

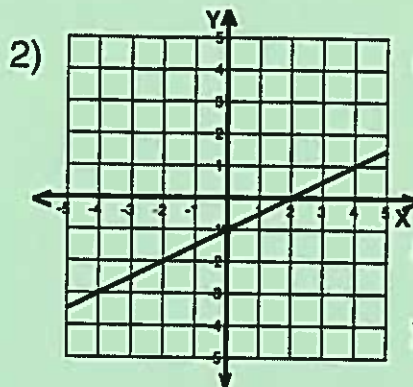
Sketch Each Line and Find the Slope and Y-intercept



equation $y = -5x - 3$

slope (m) = -5

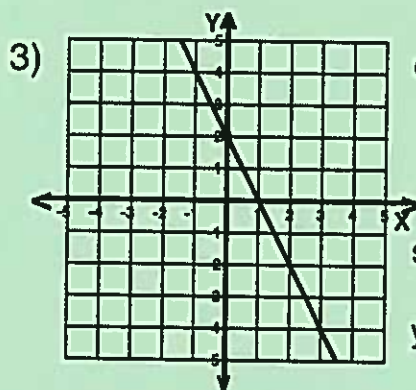
y-intercept = -3



equation $y = \frac{1}{2}x - 1$

slope (m) = $\frac{1}{2}$

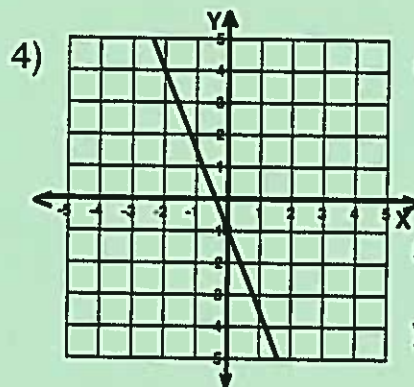
y-intercept = -1



equation $y = -2x + 2$

slope (m) = -2

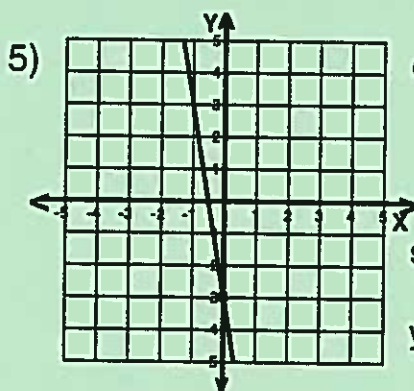
y-intercept = 2



equation $y = -\frac{5}{2}x - 1$

slope (m) = $-\frac{5}{2}$

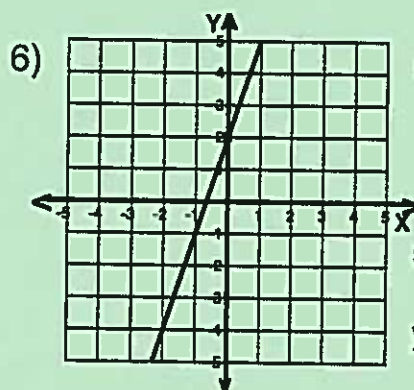
y-intercept = -1



equation $y = -6x - 3$

slope (m) = -6

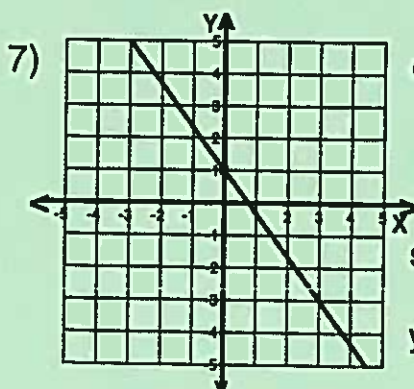
y-intercept = -3



equation $y = 3x + 2$

slope (m) = 3

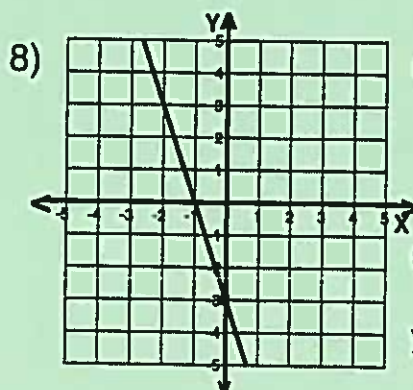
y-intercept = 2



equation $y = -\frac{4}{3}x + 1$

slope (m) = $-\frac{4}{3}$

y-intercept = 1



equation $y = -3x - 3$

slope (m) = -3

y-intercept = -3

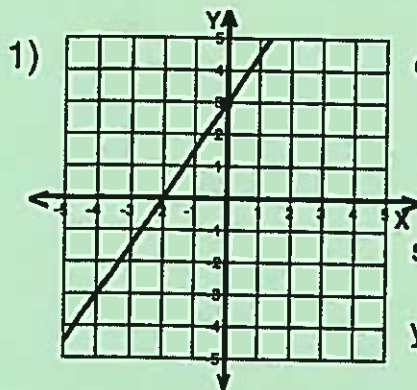
Name : _____

Score : _____

Teacher : _____

Date : _____

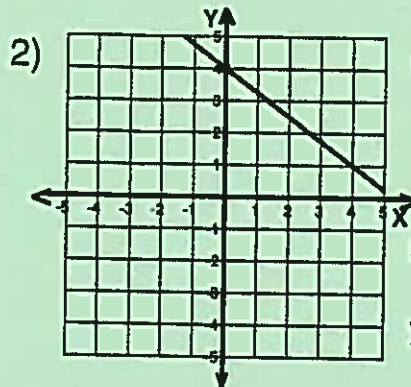
Sketch Each Line and Write the Equation



equation $y = \frac{3}{2}x + 3$

slope (m) = $\frac{3}{2}$

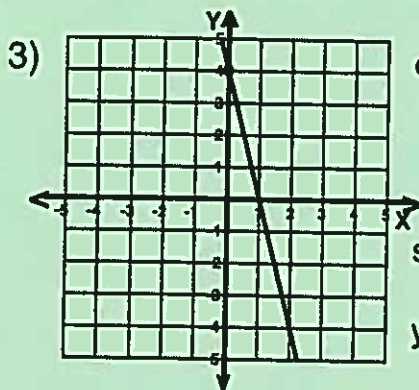
y-intercept = 3



equation $y = -\frac{3}{4}x + 4$

slope (m) = $-\frac{3}{4}$

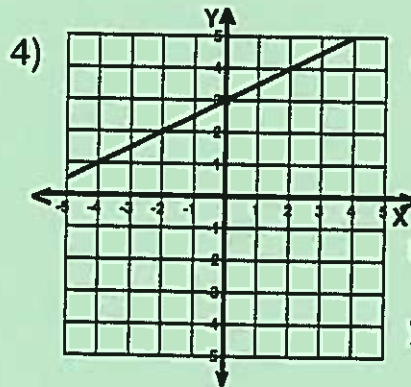
y-intercept = 4



equation $y = -4x + 4$

slope (m) = -4

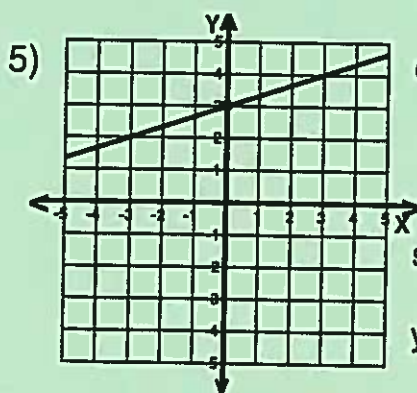
y-intercept = 4



equation $y = \frac{1}{2}x + 3$

slope (m) = $\frac{1}{2}$

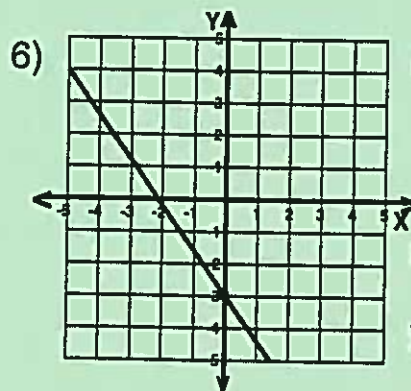
y-intercept = 3



equation $y = \frac{1}{3}x + 3$

slope (m) = $\frac{1}{3}$

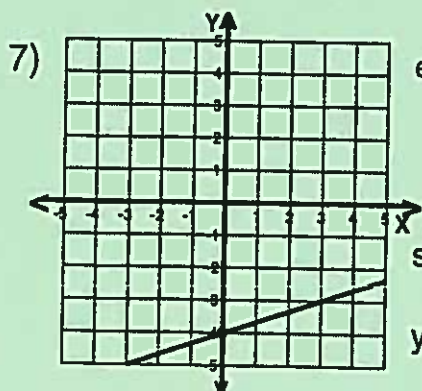
y-intercept = 3



equation $y = -\frac{7}{5}x - 3$

slope (m) = $-\frac{7}{5}$

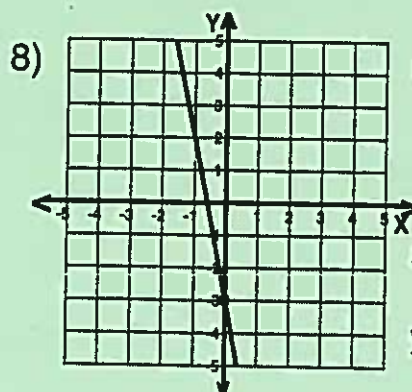
y-intercept = -3



equation $y = \frac{1}{3}x - 4$

slope (m) = $\frac{1}{3}$

y-intercept = -4



equation $y = -5x - 3$

slope (m) = -5

y-intercept = -3